

Assessment Test for Singapore Primary Mathematics 5A, Standards Edition

This test covers material taught in Primary Mathematics 5A, Standards Edition
(<http://www.singaporemath.com/>)

1.	Consider the number 49,752,003,096	
(a)	Write the number in words.	[1]
(b)	What is the place value of the digit 4 in this number? _____	[1]
(c)	What digit is in the ten millions place? _____	[1]
(c)	Round this number to the billions. _____	[1]
(c)	Is 49,752,030,096 greater than or smaller than this number? _____ By how much? _____	[1]
2.	Round each number to the nearest hundred thousand and then estimate the value of	
(a)	$899,371 + 6,790,897$	[1]
(b)	$5,296,003 - 742,851$	[1]
3.	Estimate the value of	
(a)	$492,396 \times 7$	(b) $3,899,465 \div 9$ [2]
(c)	8304×480	(d) $63,854 \div 830$ [2]

Copyright © 2008 [SingaporeMath.com Inc.]. All rights reserved.

These assessment tests and answer keys may be printed out and used by individuals at no cost. They may not be copied or incorporated into any other document. Please see legal (<http://www.singaporemath.com/terms.asp>) for more information.

8. Solve using mental calculation:

(a) $498 + 372 =$

(b) $501 + 845 =$

[2]

(c) $534 - 398 =$

(d) $700 - 82 =$

[2]

(e) $99 \times 4 =$

(f) $29 \times 80 =$

[2]

(g) $25 \times 32 =$

(h) $11 \times 12 =$

[2]

9. Solve. Give your answer as a whole number or a mixed number.

(a) $2304 \div 24$

(b) $2176 \div 68$

[4]

(c) $22 \div 8$

(d) $4576 \div 24$

[4]

10. Sam bought 3 shirts and 2 pairs of pants for \$135. Each pair of pants costs \$15 more than each shirt. What was the cost of 1 pair of pants? [3]

11. Aaron saved twice as much money as Britney. Carlos saved \$70 more than Britney. If they saved \$1790 altogether, how much did Carlos save? [3]

12. Express in its simplest form.

(a) $3\frac{5}{6} + 2\frac{9}{10}$

(b) $5\frac{1}{9} - 2\frac{2}{3}$

[4]

(a) $6 \times \frac{3}{4}$

(b) $\frac{3}{8}$ of 20

[4]

(c) $\frac{3}{10} \times \frac{5}{6}$

(d) $\frac{9}{16} \div 6$

[4]

(c) $6 \div \frac{3}{5}$

(d) $\frac{3}{4} \div \frac{5}{8}$

[4]

13. Find the equivalent measures

(a) $4\frac{4}{5}$ min = _____ s

(b) $3\frac{5}{8}$ lb = _____ oz [2]

(c) $2\frac{1}{5}$ m = _____ cm

(d) $6\frac{1}{3}$ ft = _____ in. [2]

14. (a) What fraction of \$2 is 75¢? _____ [1]

(c) Express 8 months as a fraction of 2 years. _____ [1]

15. Cathy spent $\frac{4}{5}$ of her money while Josie spent $\frac{1}{2}$ of her money. Both of them had the same amount of money left. If Josie had \$35 left, how much did Cathy have at first? [3]

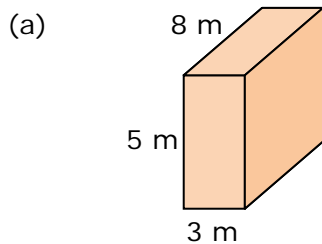
16. Peter spent $\frac{1}{3}$ of his money on a toy car and $\frac{2}{3}$ of the remainder on a toy boat. He had \$6 left. How much money did he spend altogether? [3]

17. A tank is $\frac{3}{5}$ full with water. If 30 liters more water are needed to fill the tank completely, find the capacity of the tank. [3]

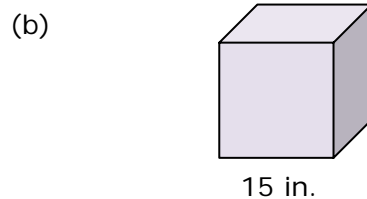
18. (a) How many pieces of string, each $\frac{1}{4}$ meters long, can be cut from a piece of string that is $\frac{7}{8}$ meters long? [2]

(b) How many centimeters of string will be left over? [1]

19. Find the volume and surface area of the rectangular prism and cube. [4]



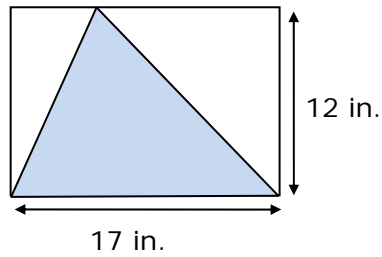
Volume: _____
Surface Area: _____



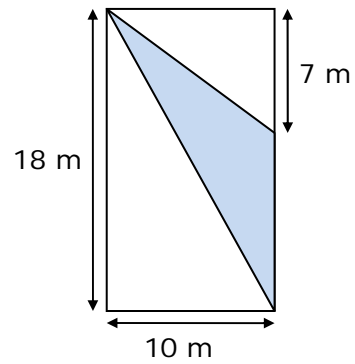
Volume: _____
Surface Area: _____

20. Find the shaded area of each rectangle.

(a)

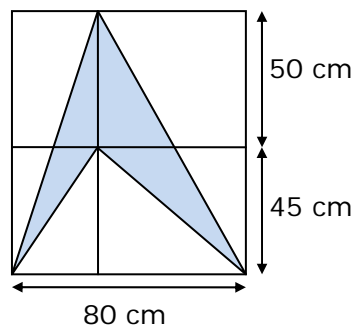


(b)

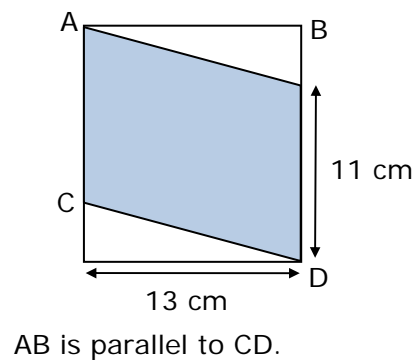


[4]

(c)

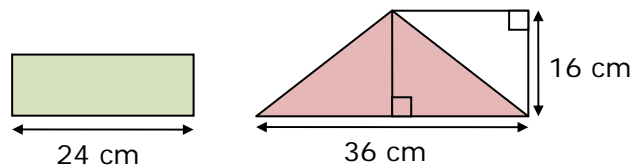


(d)



[4]

21. The area of the shaded rectangle is the same as the area of the shaded triangle. Find the perimeter of the rectangle. (Drawings are not to scale.) [3]



Copyright © 2008 [SingaporeMath.com Inc.]. All rights reserved.

These assessment tests and answer keys may be printed out and used by individuals at no cost. They may not be copied or incorporated into any other document. Please see legal (<http://www.singaporemath.com/terms.asp>) for more information.

22. Express the ratio 16 : 20 in its simplest form. [1]

23. There are 24 students in class. 10 of them are boys. Find the ratio of the number of boys to the number of girls in class. [1]

24. A pole, 135 cm long, is painted red, white, and blue in the ratio 3 : 4 : 2. What length of the pole is painted white? [2]

25. Abe, Barry, and Carlos have 256 marbles altogether. The ratio of Abe's marbles to Barry's marbles is 4 : 3. Barry has 14 more marbles than Carlos. How many marbles does Abe have? [3]

Answer Key

1. (a) forty-nine billion, seven hundred fifty-two million, 3 thousand, ninety-six
(b) ten billion (b) 5
(c) 50,000,000,000
(d) greater than, by 27,000
2. (a) 7,700,000 (b) 4,600,000
2. (a) 3,500,000 (b) 400,000
(c) 4,000,000 (d) 80
4. 1800
5. $2^2 \times 3 \times 7$
6. (a) 0 (b) 800
(c) 10
7. (a) 3; 3 (b) 30
(c) 42 (d) 4; 4
8. (a) 870 (b) 1346
(c) 136 (d) 618
(e) 396 (f) 2320
(g) 800 (h) 132
9. (a) 96 (b) 32
(c) $2\frac{3}{4}$ (d) $190\frac{2}{3}$
10. \$36
11. \$500
12. (a) $6\frac{11}{15}$ (b) $2\frac{4}{9}$
(c) $4\frac{1}{2}$ (d) $7\frac{1}{2}$
(c) $\frac{1}{4}$ (d) $\frac{3}{32}$
(e) 10 (f) $\frac{6}{5}$
13. (a) 288 (b) 58
(c) 220 (d) 76
14. (a) $\frac{3}{8}$ (b) $\frac{1}{3}$
15. \$175
16. \$21
17. 75 liters
18. (a) 3 (b) 12.5 cm
19. (a) 120 m^3 158 m^2
(b) 3355 in.^3 1350 in.^2
20. (a) 102 in.^2 (b) 55 m^2
(c) 2000 cm^2 (d) 143 cm^2
21. 72 cm
22. 4 : 5
23. 5 : 7
24. 60 cm
25. 108